



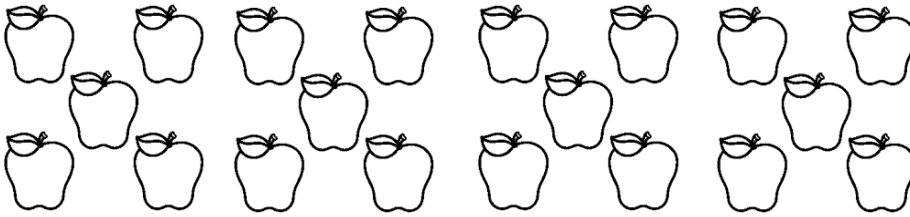
SATS

Reasoning 3

Superhero



1. Here are some apples.

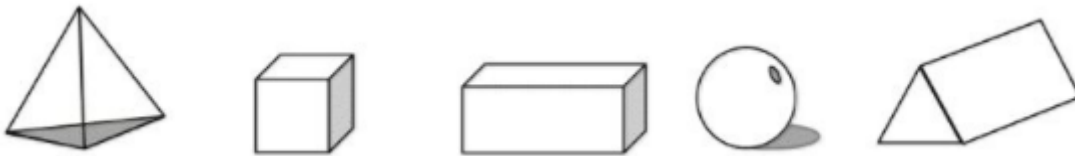


Complete the addition and subtraction calculations below.

$$\underline{\quad\quad} + \underline{\quad\quad} = 20$$

$$\underline{\quad\quad} - \underline{\quad\quad} = 10$$


2. Circle the 3D shapes which have faces that are triangles



3. Janice buys a magazine for 38p. She pays with a 50p piece.
Calculate the change Janice will receive.



4. Complete the number line below.



5. Write the missing numbers in this sequence.

4	8	12		20		32			
---	---	----	--	----	--	----	--	--	--