

Grammar and punctuation

Spellings

1. Tick the word that completes the sentence.
My jacket _____ on the back of the chair.

- I. hanging
- II. hang
- III. hung
- IV. hanged

2. Tick the correct word to complete the sentence.

The cat was hungry _____ she went to look for some food.

- and
- but
- so

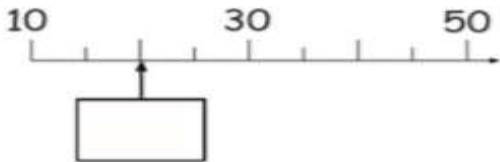
- 1. Bucket
- 2. Sand
- 3. Ball
- 4. Fish
- 5. Cloud

Reasoning

1. Sarah measures a stick. She cuts it in half. How long is each piece?



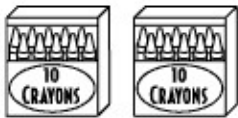
2. Look at the number line. Write correct number in the box.



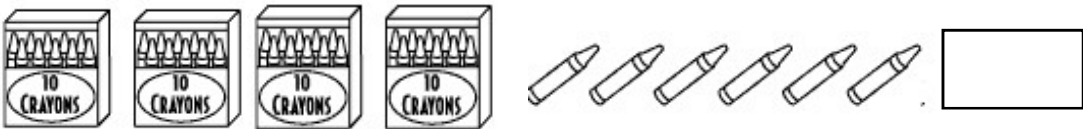
3. Use a ruler to measure the longest side of the shape.



4. Jane has 20 crayons.



Here are Sara's crayons. How many crayons does Sara has?



Arithmetic

29 + = 50

64 - = 44

$\frac{1}{2}$ of 38 =

$\frac{1}{4}$ of 24 =

10 + 20 + 32 =

= 4 X 9

22 - 19 - 2 =

28 ÷ 7 =

5. Ben has 4 red cars, 8 green cars and 10 yellow cars.

Write a sum to work out how many cars he has altogether.