

The Mum Educates

# Key Stage 1

## Mathematics

### Paper 2: reasoning




First Name	
Middle Name	
Last Name	

**Total marks**

--


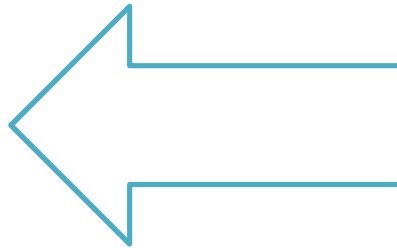

1

Tick the shape that is a pentagon.



2

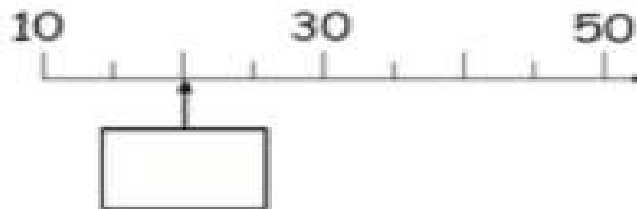
Draw a line of symmetry on each of these shapes below.



3

Look at the number line.

Write the correct number in the box below.



4

Sam buys 8 bag of candies.  
There are 5 candies in each bag.

Sam ate 5 candies.

How many candies are left?

Show your  
working.

candies

5 Look at the sequence.

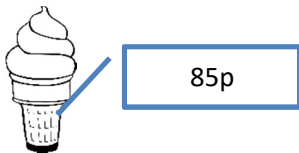


Which shape is next in the pattern?

Tick your answer.



6 Saima buys an ice cream.




She has this much money in her bag. Circle the coins she can use to pay for the ice-cream.




**7** Draw the hands on the clock to show these times.

Quarter to 11



Half past 6



**8** Here are the signs.



Use the correct sign to make each calculation correct.

$7 + 5$	<input type="text"/>	$5 \times 7$
$10 \times 6$	<input type="text"/>	$6 + 10$

9

Alex has 68 nuts.  
He gave 49 nuts to his friend.



How many nuts does Alex have left?

  
nuts

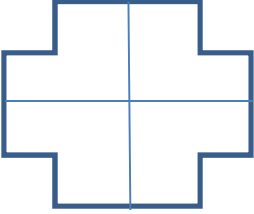
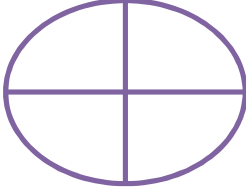
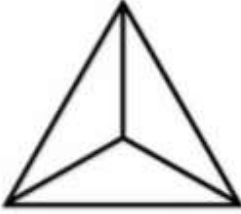

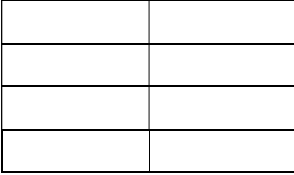
10

Write a digit in each box to make the calculation correct.

$$\begin{array}{|c|} \hline 3 \\ \hline \end{array} \begin{array}{|c|} \hline \\ \hline \end{array} - \begin{array}{|c|} \hline 1 \\ \hline \end{array} \begin{array}{|c|} \hline 6 \\ \hline \end{array} = 18$$

11

Shade fractions of the shape.

$\frac{1}{4}$	
$\frac{1}{2}$	
$\frac{1}{3}$	
$\frac{3}{4}$	
$\frac{2}{4}$	

12

A shopkeeper has some apple to sell.

He sold half of the apple.



He has only 9 apples left.

How many apples did the shop keeper start with?

apples

12

Mr. Tony brought 6 evenly divided boxes of muffins to the class.

There are 30 muffins altogether.



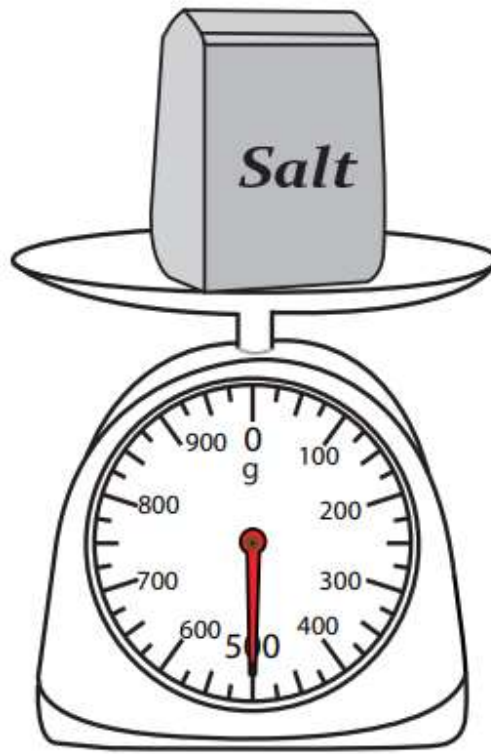
How many muffins are in each box?

muffins



13

How much does the salt weigh?

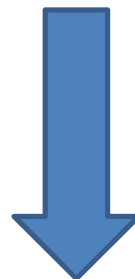



15

This is an arrow.



The arrow rotated **three quarter turn clockwise**. Circle the arrow that shows its new direction.



16

Sara had 28 lollipops.

She gave 9 to Ali.

She also gave 12 to Alex.

How many lollipop are left?

lollipops
-----------

17

Here is a tally chart for year 2 favorite food.

Food	Votes
Pizza	
Burger	
Pasta	
Hot Dog	

- How many children choose pizza as their favorite food?

\_\_\_\_\_

- What was the least favorite food?

\_\_\_\_\_

- Did more children choose burger or pasta?

\_\_\_\_\_

- How many children were there altogether?

\_\_\_\_\_

18

Sara and Sam are measuring their pencils?

Sara's pencil is \_\_\_\_\_ cm long.



Sam's pencil is \_\_\_\_\_ cm long.



Ali lost his pencil. He says his pencil is longer than Sara's pencil but shorter than Sam's pencil. What length could Ali's pencil be?

  
cm

19

Sally bought 36 cherries.

$\frac{1}{4}$  of the cherries were rotten.

How many cherries were fresh?

  
cherries

20

Amy has 30 muffins.

She shares the muffins between 10 plates.

Tick the calculation that shows how many muffins are on each plate?

$30 + 10 = 40$

$30 - 10 = 20$

$30 \div 10 = 3$

$30 \times 10 = 300$

21

Sort the jugs of orange juice from least full to most full.



A



B



C



D

22

Write the two missing numbers in this pattern.

14	17		23	26	29		35	38	41
----	----	--	----	----	----	--	----	----	----

23

Tick the two sentences that are correct.

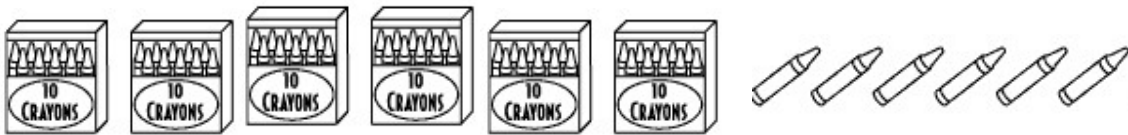
- A rectangle has two longer sides and two shorter sides.
- A rectangle has curved sides.
- A rectangle has four corners.
- A rectangle has six sides.

24

Jane has 20 crayons.



Here are Sara's crayons.



How many crayons does Sara have?

crayons

25

Sam has a £1 coin.



88p

If Sam buys this cake, how much change will he get?

pence

26

Match the numbers to the correct words below.

17

seventy

eighteen

44

fourteen

thirty-six

18

twenty-two

thirty-three

36

twenty- twelve

forty-four

seventeen

22

eighty

END OF TEST