




Grammar and punctuation

a). Look at the pictures, and write a sentence to match it.
Don't forget to use the **-ed** ending

1.  _____
(paint)

2.  _____
(chop)

3.  _____
(crash)

4.  _____
(cook)


Reasoning

1. Put these numbers in the right sentences:

65 37 94 41 29 84

_____ is between 30 and 40 _____ is between 20 and 30
_____ is between 40 and 50 _____ is between 90 and 100
_____ is between 80 and 90 _____ is between 60 and 70

2. Find a quarter of these shapes.



Spelling

Week 6: **ck** family

- stick
- kick
- lick



Now write some sentences using these words:

Arithmetic

www.themumeducates.com

a). $30 - 5 =$

b). $40 + 5 =$

c). $\frac{1}{4}$ of 16 =