

Spelling

reign
recent
natural
experience
remember

Arithmetic

_____ - 99 = 218

412 + _____ = 982

5m + 1/2m = _____ cm

Grammar and punctuation www.themumeducates.com

a). Change the meaning of each of these sentences by changing the preposition.

The cat was sitting by the box.

The path went behind the woods.

The boy scrambled through the hedge.



Sophie walked by the river.

George was hiding in the bin.

Reasoning

1. I was born in 2010. How old am I?

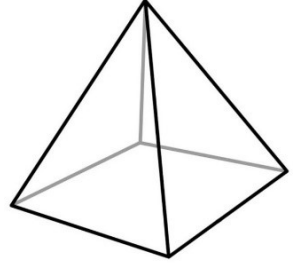
10 years
 9 years
 8 years

2. One spider has 8 legs. How many legs do 32 spiders have?

3. Which shape is this? Tick the right answer.

Triangular based prism
 Square based prism
 Hexagonal prism



Write the properties of prism in detail.