




# Back to School Math Quiz

YEAR 4

The Mum Educates



Name \_\_\_\_\_

Class \_\_\_\_\_ Date \_\_\_\_\_

Score \_\_\_\_\_

Read the questions carefully and give answers on the space provided.

Solve the following questions

1.  $350 + 437 =$  \_\_\_\_\_

2.  $250 - 75 =$  \_\_\_\_\_

3. \_\_\_\_\_  $+ 120 + 200 = 971$

4.  $700 - 491 =$  \_\_\_\_\_

5.  $350 \div 5 =$  \_\_\_\_\_

6.  $80 \div 4 =$  \_\_\_\_\_

7.  $240 -$  \_\_\_\_\_  $= 860$

8.  $32 \times 5 =$  \_\_\_\_\_

9.  $19 \times 7 =$  \_\_\_\_\_

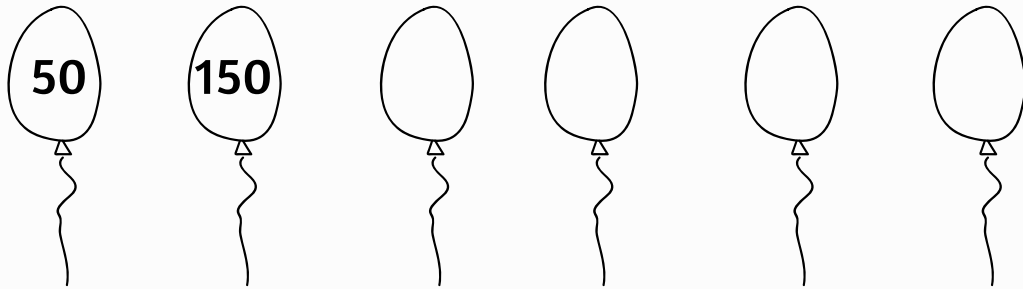
10.  $500 + 170 + 7 +$  \_\_\_\_\_  $= 1000$

Use this space for working out.

11. Write 125 in words.

---

12. Write missing numbers.



13. Write the value of the underlined number.



---

14. Write five hundred and forty-two in numbers.

---

15. Put the correct sign  $<$ ,  $>$  or  $=$

230 \_\_\_\_\_ 2673      137 \_\_\_\_\_ 136


16. Order the numbers from largest to smallest.

270      3400      123      130      1000

---

17. What is the perimeter of this square?

7 cm



---

18. How many days are there in a leap year?

---

19. There are 170 books in the library. If half of them are for kids, how many are for adults?



---

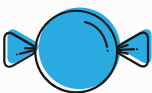
20. What is a quarter of 200?

---

21. How many sides does an octagon have?

---


22. Kim had 450 bags of candies. He sold 320 bags in a month. How many bags of candies has he left with?



---



23. What is the time on the clock?



---

24. Tom started his homework at 8:55 pm. He took 45 mins to finish his work. What time did he finish?

---



25. There are 22 cookies in a packet. Sam buys 9 packets. How many cookies does Sam have?

---

26. Write the equivalent fraction.

$$\frac{4}{5} =$$

27. The duck has 5 ducklings, each weighing 200g. How much do they weigh altogether in kilograms?



---



**THE END**

