




Back to School Math Quiz

YEAR 1

The Mum Educates



Name _____

Class _____ Date _____

Score _____

Read the questions carefully and give answers on the space provided.

Solve the following questions.

1) $6 + 1 =$ _____

2) $7 - 4 =$ _____

3) $9 + 1 =$ _____

4) $2 - 1 =$ _____

5) $3 + 4 =$ _____

6) $1 - 1 =$ _____

7) $4 + 4 =$ _____

8) $9 - 2 =$ _____

9) $6 + 7 =$ _____

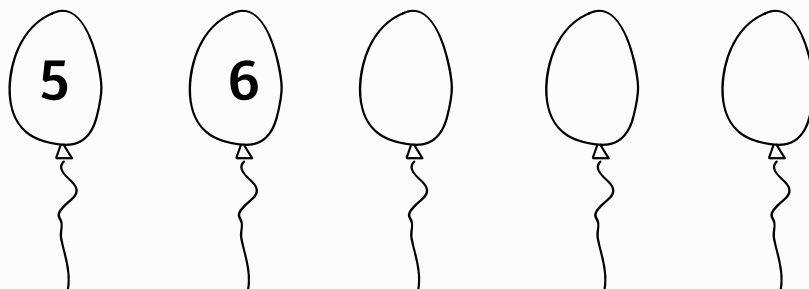
10) $5 + 5 =$ _____

Use this space for working out

11. Circle the biggest number.

6 9 4 10 5

12. Write the missing numbers.



13. Double of 2 is:

14. What is half of 6?

15. How many?



16. Circle the smallest number.

1 7 2 0 8

17. Write these numbers.

seven

four

18. 5 birds were sitting on a tree. Two birds fly away.


How many birds are left on the tree?



19. What comes next?



20. Write the name of this shape.



21. 5 children are on a bus. 2 more children got on.

How many children altogether?



22. What comes after 10?

23. Draw 7 squares.

24. Order the numbers from largest to smallest.


5	7	2	4	1	6	0	3
---	---	---	---	---	---	---	---

25. Look at the pictures. Circle the shortest in each group.



a



b



26. Circle the clock that shows 1 o'clock.



THE END

