



YEAR 1

MENTAL MATHS



THANK YOU

Thank you for downloading from The Mum Educates! I hope you enjoy the product as much as I have enjoyed making it. Please make sure to leave a comment telling me what you think.

Note: All pages of this product is copyrighted. It is only for personal use. You may not sell or redistribute any part of this file.

© The Mum Educates 2018

If you have any questions or concerns, please leave a comment or drop me a message on my Facebook page.

Please visit my website and pages:


<https://themumeducates.com/>

<https://www.facebook.com/themumeducates>

<https://www.pinterest.co.uk/themumeducates>

Complete the following questions.

1. How many eggs are there?



2. $3 + 2 =$ _____

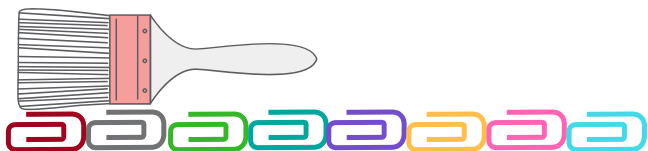


3. How many  ? _____

4. How many  ? _____

5. How many altogether?

6. Measure this paintbrush using paper clips.



7. How many blocks?




8. How many zebras are there?



9. Write the missing numbers.

1, 2, 3, _____, 5, _____

10. How many cubes do these bananas weigh?



11. $4 - 2 =$ _____

12. Circle the smallest number.

5 3 8 2

13. 4 plus 3 = _____

14. Take 3 from 5 = _____