

### Spellings

1. Cold
2. Boxes
3. Valley
4. Book
5. High

### Grammar and punctuation

1. Tick a correct word to complete the sentence below.

I baked a cake \_\_\_\_\_ my mum.

- and
- with
- the

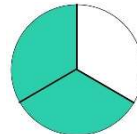
2. Tick the correct sentence below.

- Sara's doll had long, black hair and pink, beautiful dress.
- Saras doll had long, black hair and pink, beautiful dress.

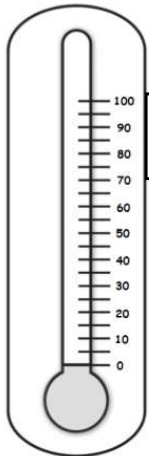
### Reasoning

1. A rubber costs 35p and a comic costs 27p. Ben has only 50p. How much more money does he need to buy rubber and comic?

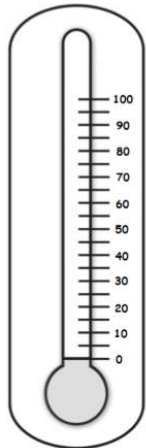
2. Sara has shaded in 1/3 of this shape. Is she correct? Explain your answer.



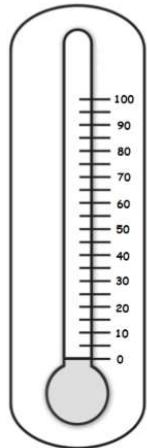
3. Colour in each of the thermometer, so it reads the temperature stated.



20 °C



35 °C



75 °C

4. Circle the things that are measured in cm.



### Arithmetic

$$47 + \boxed{\phantom{00}} = 97$$

$$39 - 18 = \boxed{\phantom{00}}$$

$$41 + 17 + 9 = \boxed{\phantom{00}}$$

$$37 - 20 - 7 = \boxed{\phantom{00}}$$

$$\frac{3}{4} \text{ of } 44 = \boxed{\phantom{00}}$$

$$\frac{1}{2} \text{ of } 10 = \boxed{\phantom{00}}$$

$$6 \times \boxed{\phantom{00}} = 30$$

$$\boxed{\phantom{00}} \div 10 = 7$$

5. Sam has 3 boxes of 10 pencils and Anna has 4 boxes of 5 pencils. Who has more? Show your working.