

### Spellings

1. Treasure
2. Measure
3. Wash
4. Mouth
5. Garden

### Grammar and punctuations

Add the correct punctuation on the end of these sentences.

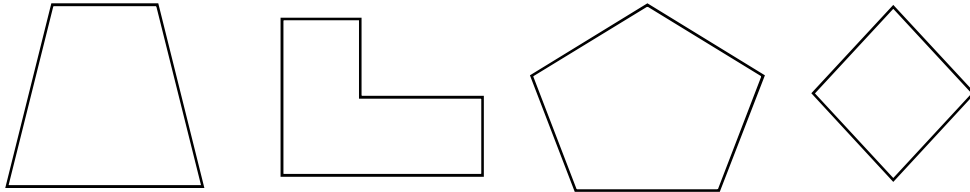
1. What time do you go to bed
2. James went swimming with his family
3. How beautiful you look today
4. Are you late for school

Can you write the shortened form of the words ?

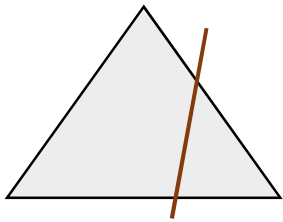
1. Is not
2. They have
3. Does not
4. You are

### Reasoning

1. Circle the shape that has 5 sides.




2. Emma drew a line of symmetry. Is she correct?



Yes

No

3. Debby is at the train station. Her train leaves at quarter past 4. Which clock shows right time?



### Arithmetic

Answer the questions

$10 + \boxed{\phantom{00}} = 48$

$16 + 44 = \boxed{\phantom{00}}$

$\frac{1}{2} \text{ of } 40 = \boxed{\phantom{00}}$

$\frac{3}{4} \text{ of } 16 = \boxed{\phantom{00}}$

$10 + 20 + \boxed{\phantom{00}} =$

$5 \times 4 = \boxed{\phantom{00}}$

$50 - 10 - 13 = \boxed{\phantom{00}}$

$30 \div 3 = \boxed{\phantom{00}}$

4. Bob has 10 bags of marbles. Each bag holds 7 marbles. How many marbles he have in total? Show your working.