

Spellings

1. written
2. kettle
3. tunnel
4. nicer
5. happiest

Grammar and punctuation

1. Tick the word that completes the sentence.

The cartoons we _____ was amazing!

- see
- saw
- seeing


2. Tick the correct word to complete the sentence below.

You can go to park _____ you finish your homework.


- or
- if
- But

Reasoning

1. Sam has 16 crayons:



How many crayons does Sara have?



2. Sam has a £2 coin. If Sam buys this cake, how much change will he get?



£ 1.20

3. Gloria picks these three numbers out of a bag.

46


12

24

Put these numbers into the correct places below:

 > >

4. Which 2-D shape can be found on a cylinder?



Arithmetic

$29 + \square = 36$

$82 - \square = 19$

$\frac{3}{4} \text{ of } 8 = \square$

$\frac{1}{4} \text{ of } 28 = \square$

$32 + 3 + 3 = \square$

$8 \times \square = 16$

$24 - 4 - 10 = \square$

$24 \div 2 = \square$

5. Anna has 40 blackberries. She ate 10 blackberries. She also gives 13 to her friend. How many blackberries does she have left?

Show your working.