

### Spellings

1. picture
2. mission
3. corner
4. lamb
5. teeth

### Grammar and punctuation

1. Write the missing punctuation mark to complete the sentences below.




- What time is it
- My name is Fred
- Put your shoes away
- What an amazing day it was

2. Tick the correct word to complete the sentence below.  
I ate biscuits \_\_\_\_\_ I was hungry.

- or
- when
- because
- if

### Reasoning

1. Here are the prices of toys in a toy shop.

<b>Doll</b>	<b>Lego</b>	<b>Toy soldier</b>
 37p	 20p	 45p


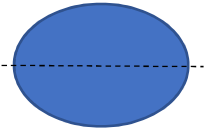

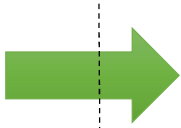
Aliya buys 2 dolls and Lego. How much money does she spend?

Ben buys Lego and 1 toy soldier. Did he spend more than Aliya?

2. Can you find the missing numbers?

5, 15, \_\_\_\_, 35, 45, \_\_\_\_

3. Tick the correct lines of symmetry.

4. I am thinking of a 3D shape with 1 face, 0 vertices and 0 edges.

What shape am I thinking of?

### Arithmetic

$26 + \boxed{\phantom{00}} = 38$

$\frac{3}{4} \text{ of } 16 = \boxed{\phantom{00}}$

$88 - \boxed{\phantom{00}} = 19$

$\frac{1}{4} \text{ of } 36 = \boxed{\phantom{00}}$

$28 + 17 + 3 = \boxed{\phantom{00}}$

$9 \times \boxed{\phantom{00}} = 18$

$25 - 5 - 9 = \boxed{\phantom{00}}$

$22 \div 2 = \boxed{\phantom{00}}$

5. Sara bakes 7 trays of muffins. Each tray contains 5 muffins. She sells 16 muffins and eats 5.

How many muffins does she have left? Show your working.

