

Spelling	Arithmetic	$46 \div 2 =$	$706 - 10 =$	$57 + 39 - 14 =$
stream scream bean mean clean				

www.themumeducates.com

Grammar and punctuation


1. Underline all of the common nouns, and circle all of the proper nouns in each sentence.


- Henry plays games on his computer.
- Mr. Fan runs in the park every Sunday.
- Caroline lives in an apartment on Loxford Boulevard.
- Dr Flood is flying on a plane to Norway.
- Kinza's birthday is in April.
- Fluffy likes playing with ball in the Victoria Park.

2. Add commas where they belong in each sentence.

- The girl went to the mall and she bought lots of clothes.
- I like blue green and red colours
- My dog likes to run swim and play.
- Will you help me wash the dishes dust the furniture and vacuum the living room.

Reasoning

1. An apple weighs 190g 

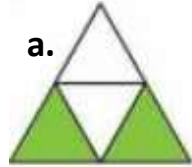

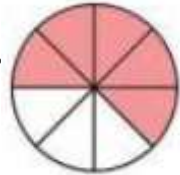
An apple and pear weigh 400g. 

How much does the pear weigh? _____

How much do two apples weigh? _____

2. There are 90 marbles in a bag. Eight children each takes four marbles. How many marbles are left in the bag? _____

3. Tick the shapes which show fractions equivalent to $\frac{1}{2}$.

a.  b.  c. 

Which shape doesn't have $\frac{1}{2}$ shaded? Explain your answer.