




# Back to School Math Quiz

**YEAR 2**

The Mum Educates



Name \_\_\_\_\_

Class \_\_\_\_\_ Date \_\_\_\_\_

Score \_\_\_\_\_

Read the questions carefully and give answers on the space provided.

Solve the following sums.

1)  $10 + 3 =$  \_\_\_\_\_

2)  $17 - 4 =$  \_\_\_\_\_

3) \_\_\_\_\_  $+ 11 = 19$

4)  $20 - 7 =$  \_\_\_\_\_

5)  $21 + 4 =$  \_\_\_\_\_

6)  $14 - 9 =$  \_\_\_\_\_

7)  $19 -$  \_\_\_\_\_  $= 4$

8)  $13 + 9 =$  \_\_\_\_\_

9)  $6 + 7 =$  \_\_\_\_\_

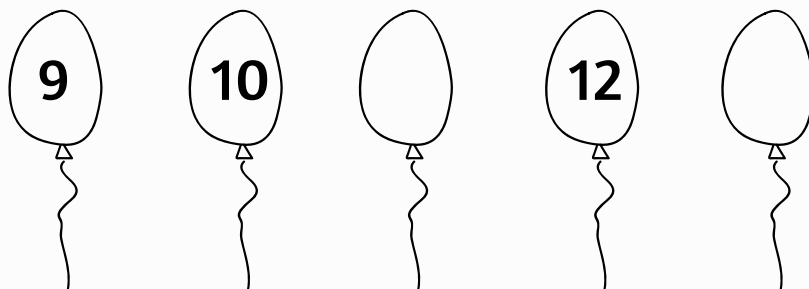
10)  $10 +$  \_\_\_\_\_  $= 20$

Use this space for working out

11. Circle the largest number.

6      9      24      25      9

12. Write missing numbers.



13. Double of 9 is.

---

14. What do you add to 18 to make it 20?

---

15. Put the correct sign  $<$ ,  $>$  or  $=$

8 \_\_\_\_\_ 7

20 \_\_\_\_\_ 20

14 \_\_\_\_\_ 18

16. Half of 20 is:

---

17. Circle the smaller number.

19      17      22      33      18

18. Write 15 in word.

\_\_\_\_\_

19. Tom has 16 pens. He bought 7 more. How many has he got altogether?




\_\_\_\_\_

20. What is  $\frac{1}{2}$  of 8?

\_\_\_\_\_

21. What is the name of this shape?

\_\_\_\_\_



22. Which of these weigh more?



\_\_\_\_\_

23. What comes after 16?

---

24. Double of 7 is:

---

25. If there are 7 tigers, 4 pandas and 9 monkeys in a zoo. How many animals are there altogether?



---

26. Mark the longest line.

a 

---

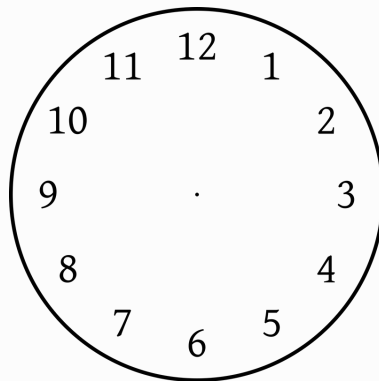
b 

---

c 

---

27. Draw the hour and minute hand on the clock to show quarter past nine.



**THE END**

