

Back to School Math Quiz

YEAR 3

The Mum Educates



Name _____

Class _____ Date _____

Score _____

Read the questions carefully and give answers on the space provided.

Solve the following questions.

1) $12 + 44 =$ _____

2) $57 - 27 =$ _____

3) _____ $+ 13 = 30$

4) $17 - 9 =$ _____

5) $35 \div 5 =$ _____

6) $44 \div 4 =$ _____

7) $34 -$ _____ $= 26$

8) $30 + 9 =$ _____

9) $5 \times 7 =$ _____

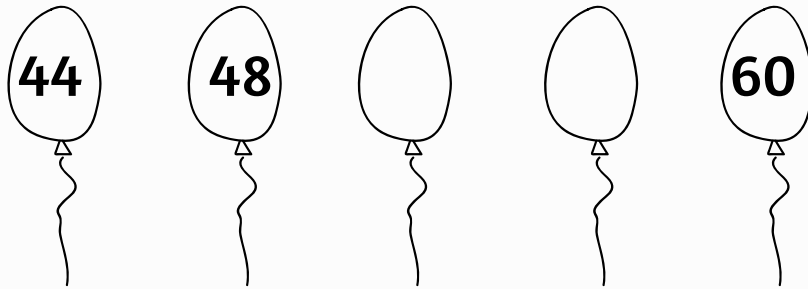
10) $12 +$ _____ $= 40$

Use this space for working out.

11. Circle the largest number.

6 9 14 40 18

12. Write the missing numbers.



13. Write the value of the underlined digit in 350.

14. Order the numbers from smallest to largest.

8 29 15 14 35

15. Put the correct sign. (<, > or =)

23 _____ 33

90 _____ 9

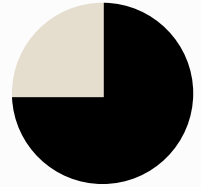
16. Sara bought 2 bars of chocolate. Each bar of chocolate costs 20p. She gave 50p to the shopkeeper. How much change will she get back?



17. Circle the numbers that are odd.

14 9 22 13 34


18. What fraction of this circle is shaded in black?



19. Anna had 30 pencils. She gave 10 to her friends and 7 to her brother. How many has she left with?

20. What is $\frac{1}{4}$ of 20?

21. What is the name of this 3D shape?




22. John has 45 cars and his mother gave him 19 more, how many cars does he have altogether?

23. Circle the numbers that are even.

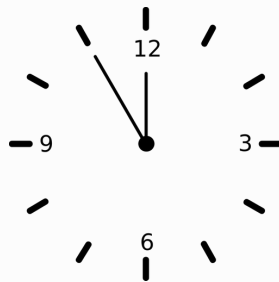
30 4 7 33 18

24. What are 4 lots of 3?

25. How many legs do 5 spiders have?



26. Write the digital time.



27. Draw the line of symmetry for each image below.



THE END

