

# Year 1 Maths and English Book Sample



10 MINUTES DAILY EXERCISE.  
7 WEEKS OF WORKSHEETS

THE MUM EDUCATES

**BUY FULL BOOK NOW**

<https://themumeducates.com/shop>

**10 MINUTES DAILY EXERCISE.**

**7 WEEKS OF WORKSHEETS**

**over 480 questions**



*© The Mum Educates 2018*

Name \_\_\_\_\_



Week 1  
Day 2




### Spelling

Circle the correct word that matches the picture.

mat

hat

cat



### Grammar

Read this sentence and correct the capital letters and full stop. Rewrite The correct sentence below.

emily likes to play with sarah

### Mental maths

$$2 + 2 = \underline{\quad}$$

$$3 + 7 = \underline{\quad}$$

$$7 - 3 = \underline{\quad}$$

$$8 - 4 = \underline{\quad}$$

### Word Problem


There are 6 eggs in the fridge. Olivia took 2 eggs for baking a cake. How many eggs are left in the fridge?



\_\_\_\_\_

### Time

Draw the hands on the clock to show 3 o'clock.



### Length

Circle the bottle that is longer.




How did I do in the test?



Name \_\_\_\_\_



Week 1  
Day 5



### Spelling

Write one word that rhymes with the given words.

sad \_\_\_\_\_

sit \_\_\_\_\_

### Grammar

Write the plural of this singular noun.

1. one pencil two \_\_\_\_\_



2. one cake two \_\_\_\_\_



### Reasoning

Max has counted the toy cars. He says "There are 5 toy cars".  
Is Max correct? Explain your answer



### Word Problem

Tom had 12 bears. His friend Kim gave him 5 more. How many bears does he have now?

---

---

### Fraction

Circle half of these cupcakes.



### Numbers

Match the cups to the correct number.



2

5

3

How did I do in the test?




Name \_\_\_\_\_



Week 3

Day 3



### Spelling

Write the missing letter to complete the word.

1. \_\_\_\_ a t



2. \_\_\_\_ a t



### Punctuation

Draw lines to show whether the sentence needs a full stop or a question mark.

I love my mum



Are you angry



Can you help her

### Mental maths

3 less than 7 is \_\_\_\_\_

double of 7 is \_\_\_\_\_

4 more than 8 is \_\_\_\_\_

### Money

Circle the 50 pence coin.



### Comparing Numbers

Compare the numbers with  $<$ ,  $>$  or  $=$ .

3 \_\_\_\_\_ 6

10 \_\_\_\_\_ 9

5 \_\_\_\_\_ 5

### Length

How Long?



The bottle is \_\_\_\_\_ cm long.

How did I do in the test?

