

Year 2

4-A-DAY

Mathematics

Sample



10 Weeks of Daily Worksheets

The Mum Educates

Name: _____

Week 3

Maths

4-A-Day

MONDAY

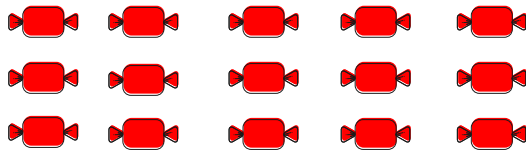
1. Use symbols $>$, $=$ or $<$ to compare these numbers.

32 46

24 24

52 51

2. $\frac{2}{3}$ of 15 candies are _____



3. Draw lines to match the coins to its values.

10p



£1



50p



4. Circle the even numbers.

31 44 12 17 20
23 36 8 35
9 14

TUESDAY

1. Solve the following.

$43 + 23 =$ _____

_____ $- 16 = 12$

$24 -$ _____ $= 11$

_____ $+ 14 = 52$

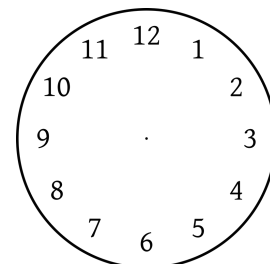
2. How many legs do 9 penguins have?



How many toes do 5 babies have?



3. Amna left for the office at 2:15 pm. It took her 30 minutes to reach her office. Draw the hands on the clock to show the time when she reached.



4. Complete the sequence.



Maths

4-A-Day

W
E
D
N
E
S
D
A
Y

1. Mary read 43 books whereas Ben read 24 books. How many more books has Mary read than Ben?



2. $\frac{3}{4}$ of 20 pastries are _____

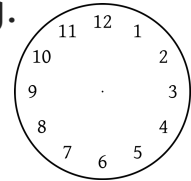


1. 56 47 65
 - 28 + 31 - 53

2. Nick gave these coins to a shopkeeper to pay for a packet of crisps that costs 23p. What change did he get?



3. Amna started playing at 5: 00. She played for two hours and twenty minutes. Show the time on the clock when she finished playing.



4. There are two flowers in each pot. One flower costs 10p. How much does a pot cost?

_____p



- How much do three pots cost?

_____p

3. Use <, > or = to make each statement correct.

36 - 5 31

20 ÷ 2 12

120 102

4. Draw a 2D shape that has no corners.

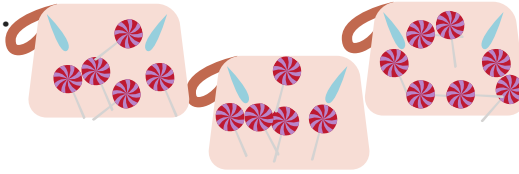
T
H
U
R
S
D
A
Y

Maths

4-A-Day

F
R
I
D
A
Y

1. There are candies in each bag.



How many candies are there?

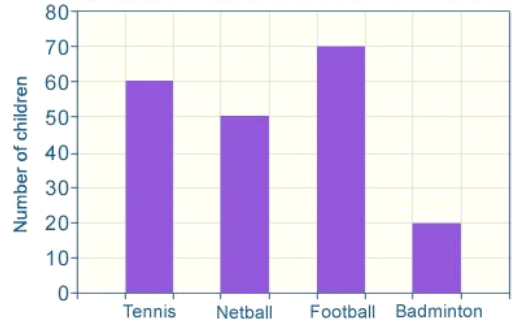
2. There are 16 dolls in one pack. Sita shares a quarter of dolls with her friend.

How many dolls are left?



3. Look at the bar chart.

A bar chart showing school children's favourite sports



Which one is the most favourite sport?

How many children liked Tennis?

How many children participated altogether?

E
X
E
R
C
I
S
E

1. $17 + 12 =$ _____

7. $5 \times 7 =$ _____

2. $32 - 25 =$ _____

8. $8 \times 9 =$ _____

3. $70 + 44 =$ _____

9. $40 \div 5 =$ _____

4. $48 - 33 =$ _____

10. $10 + 10 + 5 =$ _____

5. $36 \div 3 =$ _____

11. $20 + 7 - 9 =$ _____

6. $12 \times 3 =$ _____

12. $22 + 9 + 3 =$ _____

BUY FULL BOOK NOW

<https://themumeducates.com/shop>

10 MINUTES DAILY EXERCISE.

10 WEEKS OF WORKSHEETS

Perfect as a warm-up, morning work, homework, or independent practice.



© The Mum Educates 2018