

Year 1

30+
Worksheets

Year 2



Mastering Multiplication




- Multiplication wheels
 - Word problems
 - True or False
 - Multiplication maze
 - Skip counting
 - Snakes and Ladders
 - Timed tests
- and much more!

Sample

Multiplication Word Problems



Example:



How many groups?

3

How many in each group?

2

Addition Sentence:

$$2 + 2 + 2 = 6$$

Multiplication sentence:

$$3 \times 2 = 6$$


Directions: Write a repeated addition sentence to match.



There are _____ equal groups with _____ in each.

$$\underline{\quad} + \underline{\quad} + \underline{\quad} + \underline{\quad} + \underline{\quad} = \underline{\quad}$$

$$\underline{\quad} \times \underline{\quad} = \underline{\quad}$$



There are _____ equal groups with _____ in each.

$$\underline{\quad} + \underline{\quad} + \underline{\quad} = \underline{\quad}$$


$$\underline{\quad} \times \underline{\quad} = \underline{\quad}$$



There are _____ equal groups with _____ in each.

$$\underline{\quad} + \underline{\quad} + \underline{\quad} + \underline{\quad} = \underline{\quad}$$


$$\underline{\quad} \times \underline{\quad} = \underline{\quad}$$



There are _____ equal groups with _____ in each.

$$\underline{\quad} + \underline{\quad} + \underline{\quad} = \underline{\quad}$$


$$\underline{\quad} \times \underline{\quad} = \underline{\quad}$$



There are _____ equal groups with _____ in each.

$$\underline{\quad} + \underline{\quad} + \underline{\quad} + \underline{\quad} = \underline{\quad}$$

$$\underline{\quad} \times \underline{\quad} = \underline{\quad}$$



There are _____ equal groups with _____ in each.

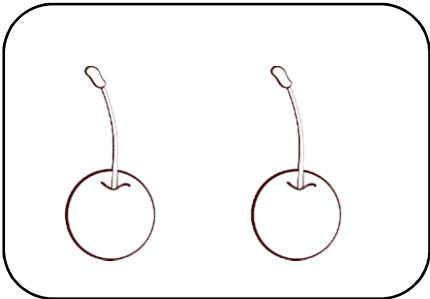
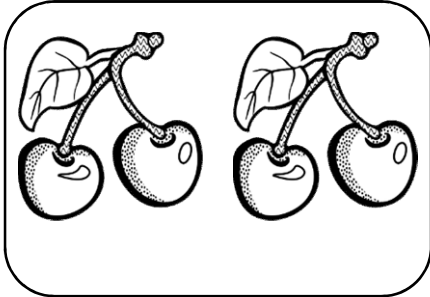
$$\underline{\quad} + \underline{\quad} = \underline{\quad}$$

$$\underline{\quad} \times \underline{\quad} = \underline{\quad}$$

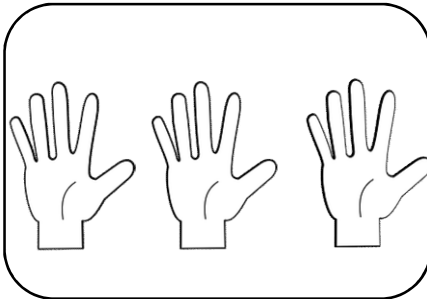
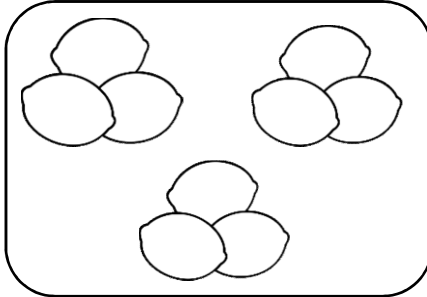
Find and Colour

Directions: Colour the picture that matches the multiplication sum.


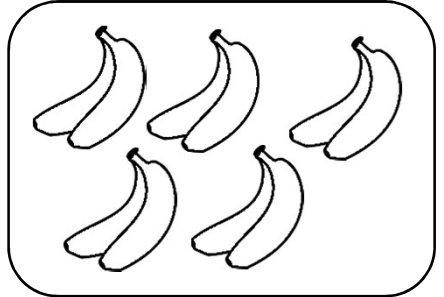
2×2



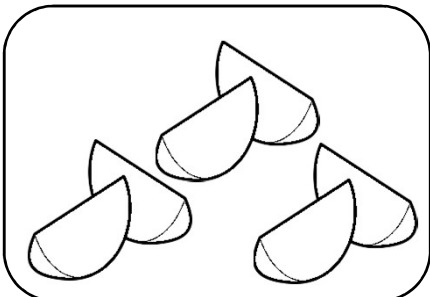

5×3



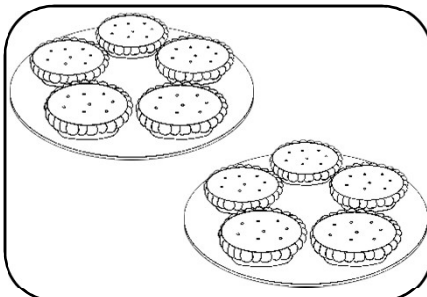
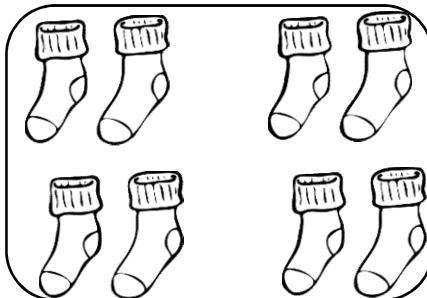
2×5




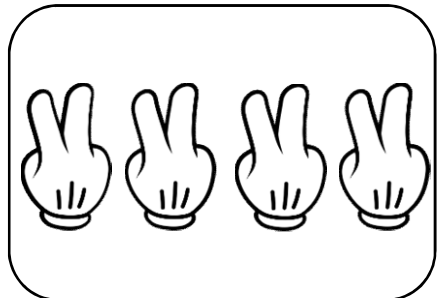
3×3



2×5

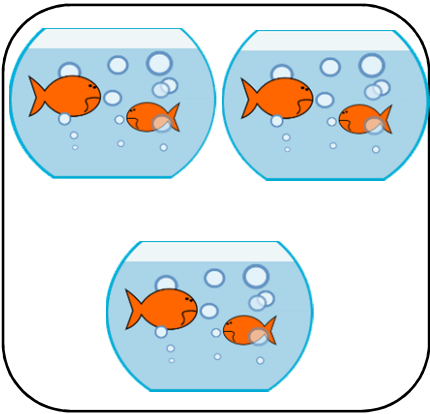


2×3



Match the picture


Directions: Look at each set of pictures. Circle the correct multiplication sum that matches the picture.



a 3×4

b 2×3

c 2×4



a 4×5

b 5×3

c 3×4



a 3×4

b 2×3


c 6×3



a 2×5

b 6×3

c 5×4



a 5×3

b 3×6

c 4×5



a 5×2

b 2×4

c 2×1

Speed Test

You have 2 minute to complete as many questions as you can. Ask your adult to check the answers with you. Try to beat your score and time next time.

Score: _____ / 50

Time: _____ min _____ sec

$2 \times 10 =$	$8 \times 5 =$	$12 \times 5 =$	$7 \times 2 =$	$1 \times 3 =$
$6 \times 3 =$	$4 \times 2 =$	$2 \times 11 =$	$8 \times 3 =$	$5 \times 7 =$
$9 \times 3 =$	$6 \times 5 =$	$8 \times 3 =$	$3 \times 12 =$	$2 \times 3 =$
$10 \times 10 =$	$12 \times 5 =$	$5 \times 2 =$	$9 \times 10 =$	$3 \times 11 =$
$4 \times 12 =$	$3 \times 12 =$	$8 \times 5 =$	$0 \times 5 =$	$2 \times 8 =$
$5 \times 5 =$	$4 \times 5 =$	$3 \times 5 =$	$1 \times 2 =$	$5 \times 2 =$
$9 \times 3 =$	$3 \times 3 =$	$6 \times 7 =$	$10 \times 10 =$	$4 \times 5 =$
$2 \times 3 =$	$9 \times 2 =$	$6 \times 2 =$	$5 \times 9 =$	$3 \times 8 =$
$11 \times 10 =$	$10 \times 5 =$	$2 \times 9 =$	$12 \times 10 =$	$9 \times 10 =$
$5 \times 12 =$	$3 \times 12 =$	$9 \times 10 =$	$8 \times 3 =$	$6 \times 2 =$