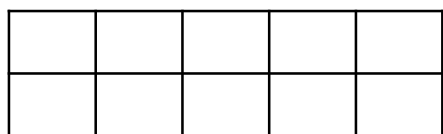



# Addition to 10


Draw counters on the ten frames to help you solve the calculations.



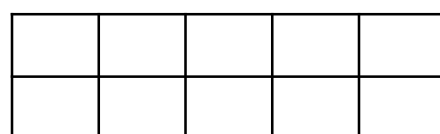
$$3 + 4 =$$



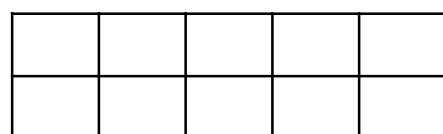
$$7 + 2 =$$



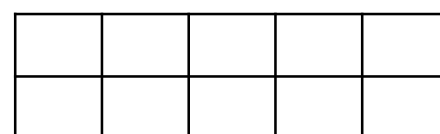
$$5 + 5 =$$



$$1 + 9 =$$



$$2 + 6 =$$



$$8 + 0 =$$

Count, write and add the fingers.



$$\square + \square = \square$$



$$\square + \square = \square$$



$$\square + \square = \square$$



$$\square + \square = \square$$



$$\square + \square = \square$$



$$\square + \square = \square$$