
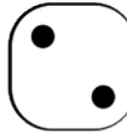






# Subtraction to 15

## Roll and Solve

Directions: Roll a die and solve a problem in that column.

Place a counter on the solved sum. The person who has most counters, wins the game.

					
$14 - 7$	$11 - 6$	$15 - 6$	$10 - 10$	$12 - 10$	$15 - 8$
$15 - 5$	$14 - 3$	$11 - 8$	$13 - 7$	$11 - 9$	$13 - 8$
$13 - 9$	$13 - 5$	$14 - 5$	$14 - 2$	$12 - 8$	$14 - 10$
$15 - 2$	$12 - 1$	$13 - 10$	$15 - 0$	$13 - 3$	$11 - 9$



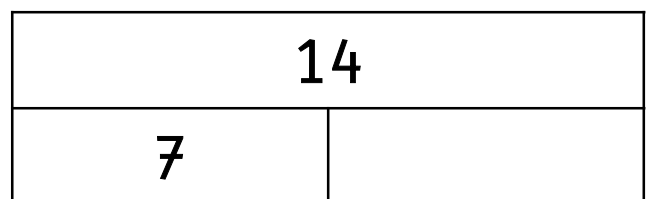
Help Sam write a number sentence for the following.

$$15 - \square = \square$$

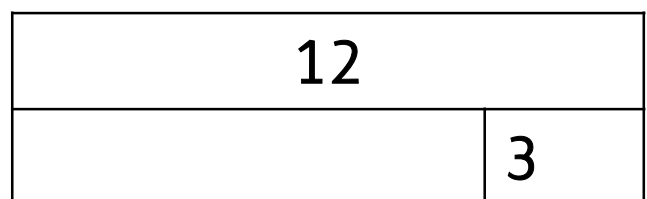
$$15 - \square = \square$$

$$15 - \square = \square$$

Complete the 2 bar models below and then complete the number sentence.



$$14 - \underline{\quad} = 7$$



$$12 - \underline{\quad} = 3$$