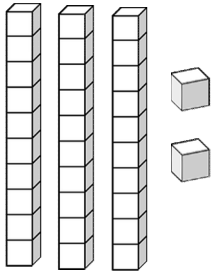
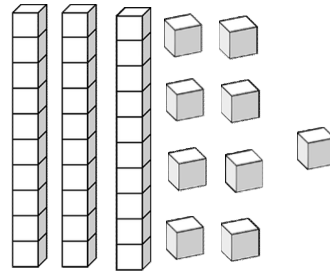


Subtraction to 50

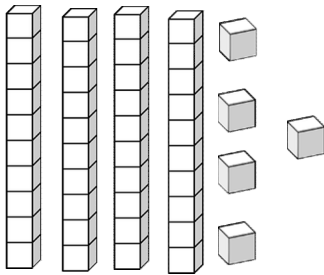
Use the base ten blocks to work out the answer.



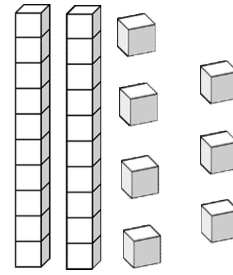
$32 - 12$



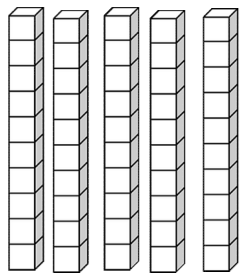
$39 - 27$



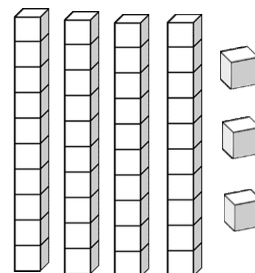
$45 - 25$



$27 - 9$




$50 - 30$




$43 - 31$


You have 50p, how much change would you get.



40p



35p




25p



42p



14p



18p