

**Grammar and punctuation**

1. Circle the correct verb form in each underlined pair to complete the sentences below.

- I were/was going to go to the shopping centre later.
- We were/was really excited to go to the zoo.
- They was/were not happy about the new Tesco reward scheme.
- Ali did/done his homework before playing games.



2. Insert a comma in the correct place in the sentence below.

Suddenly he got up and walked out of the room.



**Arithmetic**



1.  $XI + XX = \underline{\hspace{2cm}}$
2.  $C - LXVII = \underline{\hspace{2cm}}$
3.  $125 \div \underline{\hspace{2cm}} = 5$
4.  $14m < \underline{\hspace{2cm}} \text{ cm}$
5. 3 tenths is equivalent to        hundredths.

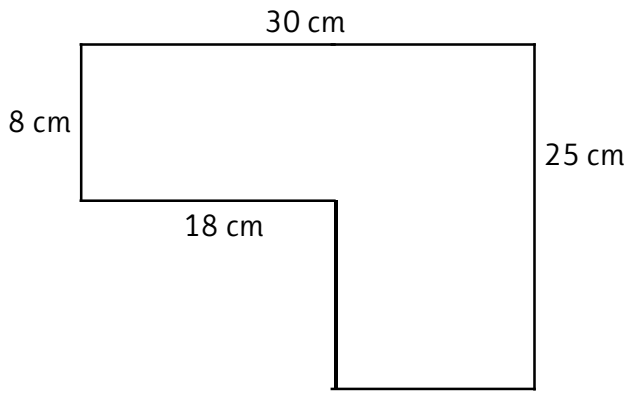
**Vocabulary**

Learn meanings, write synonyms and make sentences of the given words.

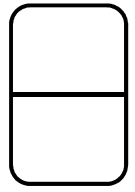

- ❖ fortress
- ❖ implored
- ❖ vaults

**Reasoning**

1. Calculate the perimeter of the given shape.



2. What fraction of the shape is shaded? Write the answer in its simplest form.



3. Complete the table. One has been done for you.

Number	÷ 10	÷ 100
36	3.6	0.36
67		
94		