

Name _____

Year 1

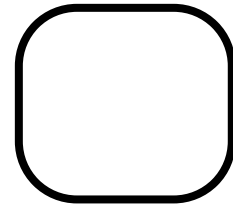




Class _____ Date _____

Autumn Progress Check 1

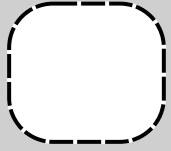
The Mum Educates

1

How many fish are there?



1 mark

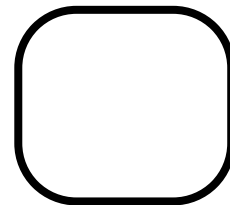



2

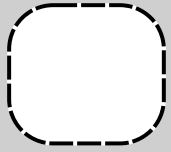
There were 7 apples on the tree.

Zoe picked 2 apple.

How many apples are left on the tree?



1 mark




3

There are 10 petals on this flower.

6 petals fall off.

How many petals are left?



1 mark

4

Write the missing number.

1 mark

2

4

8

10

12

14

5

Miss Unicorn has 3 balloons.

Mr. Turtle gives her 4 more.

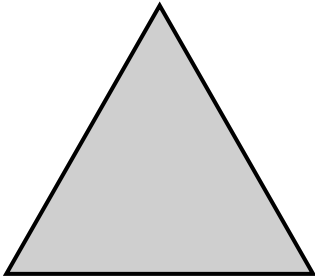
How many balloons does she have now?

1 mark




6

Draw a line to match each shape to its name.



Circle



Rectangle



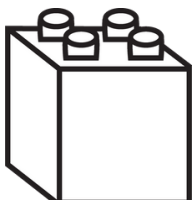



Triangle

1 mark

7


Circle all the objects that are cube shaped.



1 mark

8

Write the time shown on the clock.

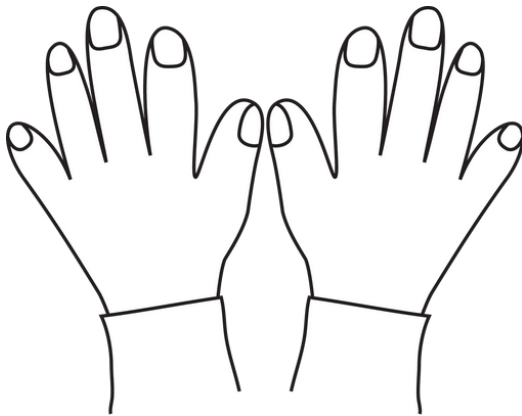


o'clock

1 mark

9

Write the double of 5.



1 mark


10

There were 9 leaves on the tree. Some leaves fell off.

4 leaves are left.

How many leaves fell off?

$$\textcircled{9} - \textcircled{\quad} = \textcircled{4}$$



1 mark