

Name _____

Year 1

Class _____ Date _____

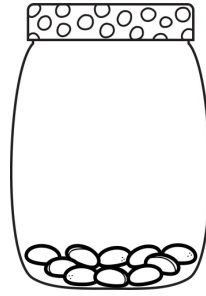
Autumn Progress Check 2

The MumEducates

1

In a jar of marbles, Sam finds 3 red and 6 yellow marbles.

How many marbles are there altogether?



1 mark

2


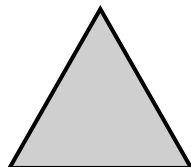

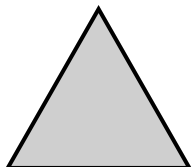
Daisy has 8p and Ali has 3p.

How much more money does Daisy have than Ali?

1 mark

3

Draw the shape that comes next.



1 mark