

Name _____

Year 1


Class _____ Date _____

Autumn Progress Check 3

The Mum Educates

1

Colour 3 candies red and 4 candies yellow.



1 mark

2

Which shape is this?



1 mark

3




Circle the 2p coin.



1 mark

4

Colour the longest flower.



1 mark

5

Circle the smallest number.

five

9

eleven


1 mark

6

Zoe has 8 apples. Jane has half as many apples as Zoe.

How many apples does Jane have?

1 mark




7


Complete the sentences below.



one more than 7 is _____



one less than 5 is _____



one more than 9 is _____

1 mark

8

Ben has 8 fish.

Jane has 2 fewer.


How many fish does Jane have?

1 mark



9

Draw hands on the clock to show that the time is 3 o' clock.



1 mark

10

Draw a line to match the number to their words.

Eight

5

Two

8

Seven

2

Five

7

1 mark