

Name \_\_\_\_\_

Year 1


Class \_\_\_\_\_ Date \_\_\_\_\_

Autumn Progress Check 4

The Mum Educates

1

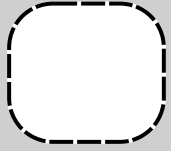
Here is part of a shape.



Draw a line to complete the shape.


Write the name of the shape.

1 mark

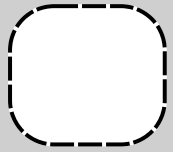


2

Draw hands on the clock to show 5 o'clock.

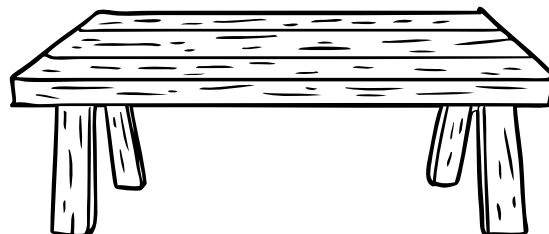


1 mark

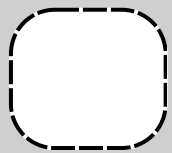


3

Draw a circle under the table.

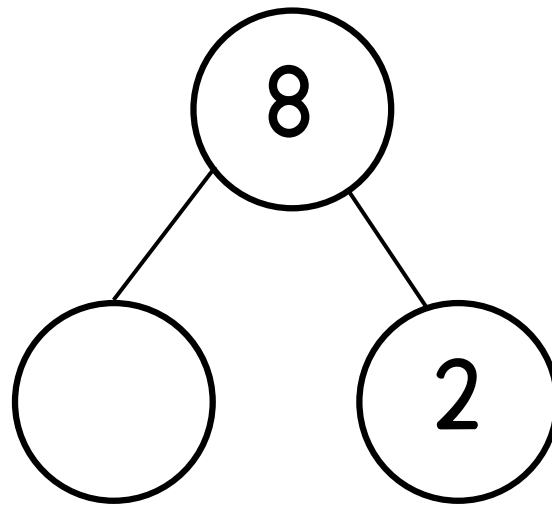
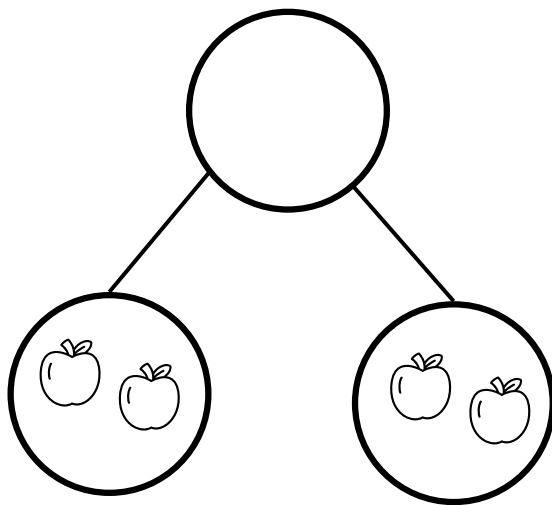


1 mark



4

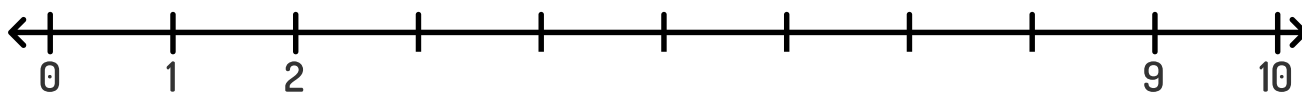
Complete the part-whole models.



1 mark

5

Complete the number line.



1 mark

6

Which number bond is the odd one out?

$8 + 1$

$9 + 0$

$5 + 4$

$9 + 1$

1 mark

How do you know?



7

Write a different way to make 5 in each box.



$$\underline{\hspace{2cm}} + \underline{\hspace{2cm}} = 5$$


$$\underline{\hspace{2cm}} + \underline{\hspace{2cm}} = 5$$

$$\underline{\hspace{2cm}} + \underline{\hspace{2cm}} = 5$$

1 mark

8

Here are some children.




How many children in total?

How many eyes in total?

1 mark

9

Complete the number track.



1 mark

three	four	five	six			
-------	------	------	-----	--	--	--

10

How many counters does each ten frame show? Match the ten frames to the words.

1 mark


nine


two


five