

Name _____

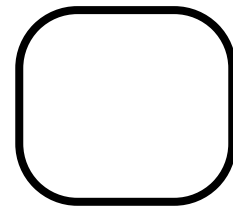





Year 1

Class _____ Date _____

Autumn Progress Check 1

The Mum Educates

1 How many fish are there?



1 mark

2 There were 7 apples on the tree.

Zoe picked 2 apples.

How many apples are left on the tree?




1 mark

3

There are 10 petals on this flower.

6 petals fall off.

How many petals are left?



1 mark

4

Write the missing number.

2

4

8

10

12

14

1 mark

5

Miss Unicorn has 3 balloons.

Mr. Turtle gives her 4 more.


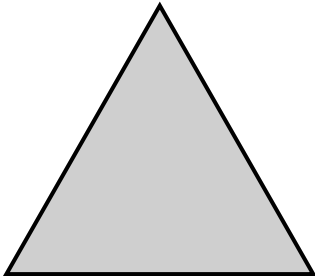
How many balloons does she have now?



1 mark

6

Draw a line to match each shape to its name.



Circle



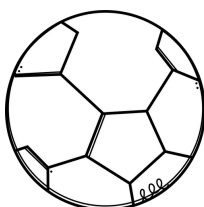
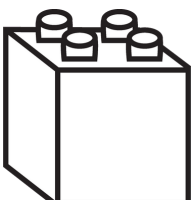



Rectangle

Triangle

1 mark

7

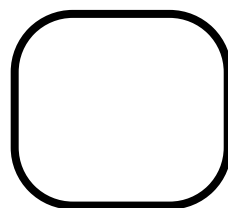

Circle all the objects that are cube-shaped.



1 mark

8

Write the time shown on the clock.

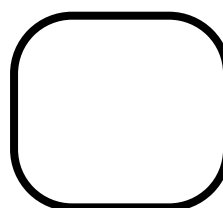
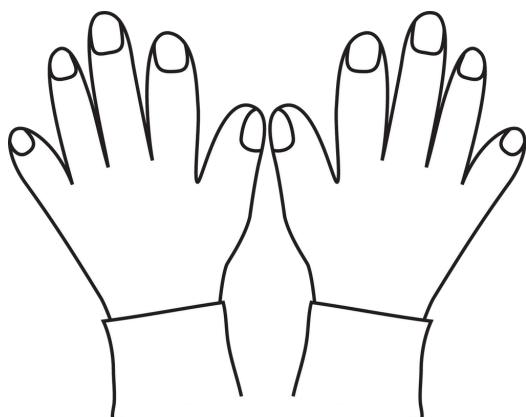


o'clock

1 mark

9

Write the double of 5.



1 mark


10

There were 9 leaves on the tree. Some leaves fell off.

4 leaves are left.

How many leaves fell off?

$$\boxed{9} - \boxed{} = \boxed{4}$$



1 mark